

# Good Morning Elm



# Thursday 9<sup>th</sup> September

# 9/9/21

If you have any queries about the work or would like to send me in some of your completed work then please use [elm@brinkworthearldanbys.wilts.sch.uk](mailto:elm@brinkworthearldanbys.wilts.sch.uk)

Mrs Gaffney 😊

Timetable for today (timings are a suggestion only)

- ▶ 9.00 - 9.45 Spelling activities
- ▶ 9.45 - 10.30 RE
- ▶ 10.30 - 11.00 Playtime
- ▶ 11.00 - 12.00 Maths
- ▶ 1.00 - 1.30 Reading Time
- ▶ 1.30 - 2.30 PSHE
- ▶ 2.30 - 3.00 Purple Mash activities

# 9.00 - 9.45 Spellings



## WALT spell alternatives for 'ee'.

- ▶ Practice spelling these words: streaming, repeated, relief, field, sunny, extremely.
- ▶ Make a poster to show alternative spelling patterns for the 'ee' sound. These might include:
  - ▶ ea, ie, y, e-e
  - ▶ You will need a pencil and paper.

## 9.45 - 10.30 RE



- ▶ WALT retell the story of creation.
- ▶ Follow this link to listen to The Creation Story:  
<https://www.youtube.com/watch?v=J9ZX4OSdlfE>
- ▶ Look at some artist's image to show each day of The Creation Story.  
<https://carolinestreetblog.wordpress.com/2018/08/06/creation-day-one-to-six-on-canvas/>
- ▶ Draw your own picture to show God's creations on Day 6.


You will need some paper and a pencil.

# 10.30 - 11.00 Playtime!

- ▶ What are you choosing to do for your playtime today?
- ▶ What will you choose for a healthy snack and drink?

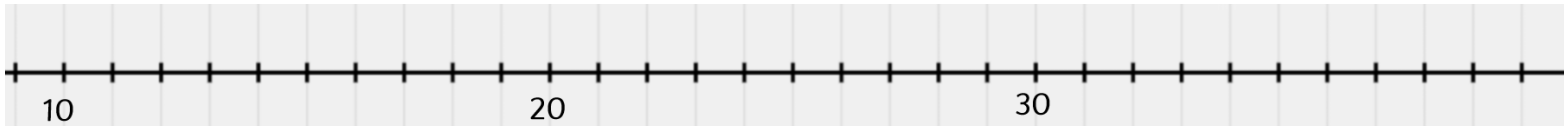


[www.thefoodphysician.com](http://www.thefoodphysician.com)

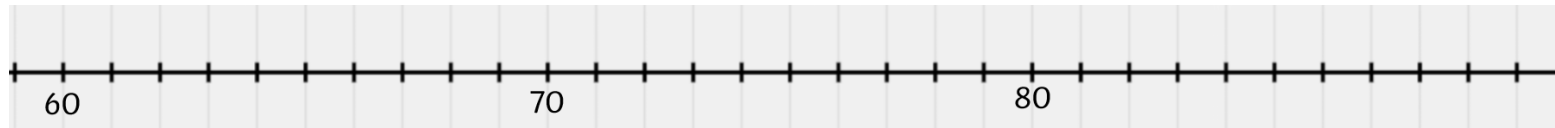


# 11.00 - 12.00 Maths A

- ▶ WALT identify 2 digit numbers on a number line.
- ▶ In this lesson, we will be looking at where 2 digit numbers belong on a number line.
- ▶ Draw a number line like the one below and fill in the missing numbers:



- ▶ Now have a go at this one:



- ▶ You will need some paper and a pencil.
- ▶ Colin the Carabou



and Coco the cockatoo



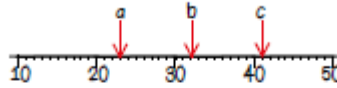
# 11.00 - 12.00 Maths B

- ▶ Now have a go at completing this sheet - the problems get harder as you work down the sheet.
- ▶ How far did you manage to get?

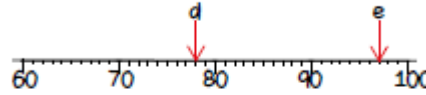


Identify 2-digit numbers on a number line

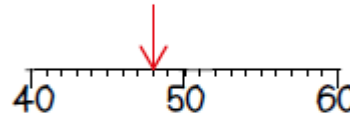
Identify the numbers a, b, c



Identify the numbers d and e

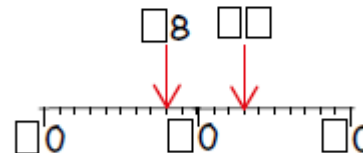


Colin thinks that the arrow is pointing to 52.



Explain why he is incorrect.

Find the missing digits.



Solve it in several different ways.

Is it possible to use five different digits?



# 12.00 - 1.00 - Lunchtime

- ▶ Well done! You've really earned your lunchbreak.
- ▶ See you at 1.00pm.





# 1.00 - 1.30 Reading Time

- ▶ Time to read.
- ▶ Go find a book/some books you would like to read.
- ▶ Or listen to a story online:
- ▶ <https://storylineonline.net/>



# 1.30 - 2.30 PSHE



- ▶ We are going to be voting for our 2 class School Council Members.
- ▶ Make a poster to show why you might like to be chosen as our School Council Member.
- ▶ If you don't fancy being on the School Council then you can make a poster to show what you think a good School Council Member is like.
- ▶ You might like to include a picture and some of the following words: helpful, friendly, good at listening, reliable.

## 2.30 - 3.00 Purple Mash



Choose one of the activities on Purple Mash to complete.